





Worksheet on Doing Vertical Subtraction with Pictures up to 20


$$\begin{array}{r} 17 \\ - 5 \\ \hline \end{array}$$




$$\begin{array}{r} 9 \\ - 5 \\ \hline \end{array}$$




$$\begin{array}{r} 20 \\ - 10 \\ \hline \end{array}$$




$$\begin{array}{r} 10 \\ - 3 \\ \hline \end{array}$$




$$\begin{array}{r} 13 \\ - 10 \\ \hline \end{array}$$



$$\begin{array}{r} 15 \\ - 5 \\ \hline \end{array}$$



$$\begin{array}{r} 14 \\ - 7 \\ \hline \end{array}$$



$$\begin{array}{r} 18 \\ - 9 \\ \hline \end{array}$$

