





## Worksheet on Doing Vertical Subtraction with Pictures up to 20


$$\begin{array}{r} 12 \\ - 10 \\ \hline \end{array}$$




$$\begin{array}{r} 16 \\ - 8 \\ \hline \end{array}$$




$$\begin{array}{r} 15 \\ - 11 \\ \hline \end{array}$$




$$\begin{array}{r} 19 \\ - 12 \\ \hline \end{array}$$




$$\begin{array}{r} 20 \\ - 14 \\ \hline \end{array}$$



$$\begin{array}{r} 17 \\ - 7 \\ \hline \end{array}$$



$$\begin{array}{r} 11 \\ - 3 \\ \hline \end{array}$$



$$\begin{array}{r} 20 \\ - 6 \\ \hline \end{array}$$

