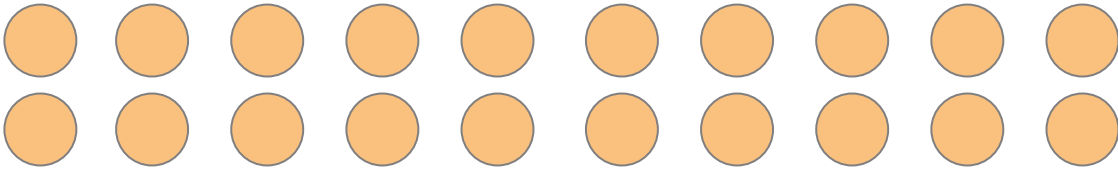





# Worksheet on Finding Subtraction Result by Crossing out Items up to 20



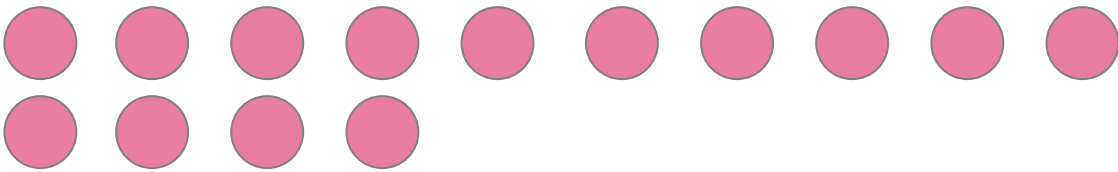
Total: \_\_\_\_\_

$$20 - 7 = \underline{\quad}$$



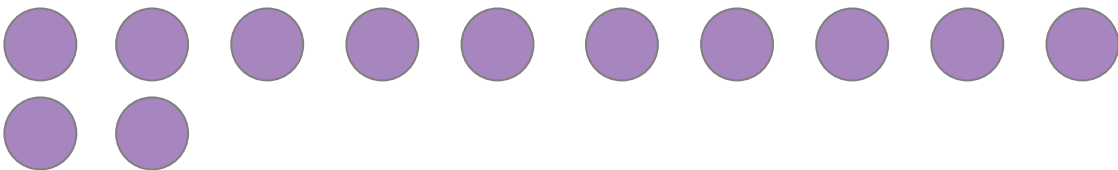
Total: \_\_\_\_\_

$$17 - 4 = \underline{\quad}$$



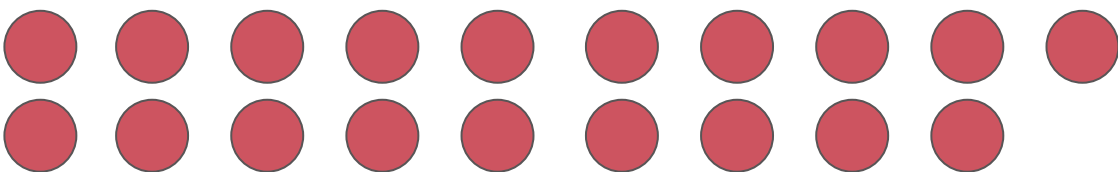
Total: \_\_\_\_\_

$$14 - 5 = \underline{\quad}$$



Total: \_\_\_\_\_

$$12 - 9 = \underline{\quad}$$



Total: \_\_\_\_\_

$$19 - 1 = \underline{\quad}$$