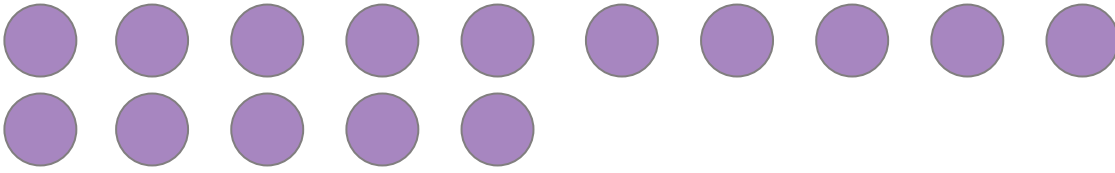


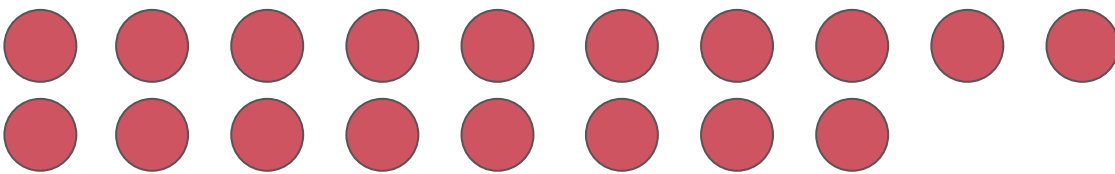


# Worksheet on Finding Subtraction Result by Crossing out Items up to 20



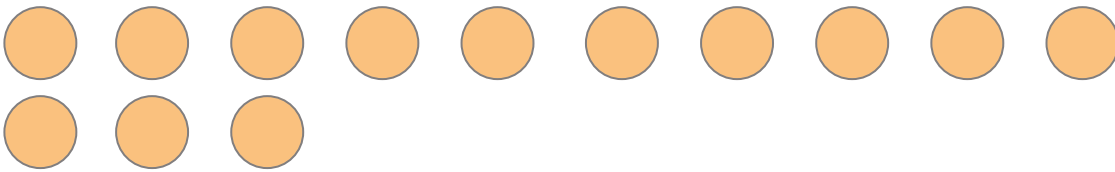
Total: \_\_\_\_\_

$$15 - 8 = \underline{\quad}$$



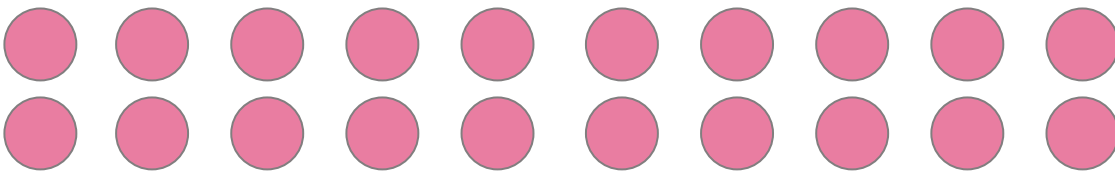
Total: \_\_\_\_\_

$$18 - 9 = \underline{\quad}$$




Total: \_\_\_\_\_

$$13 - 3 = \underline{\quad}$$



Total: \_\_\_\_\_

$$20 - 6 = \underline{\quad}$$



Total: \_\_\_\_\_

$$14 - 7 = \underline{\quad}$$