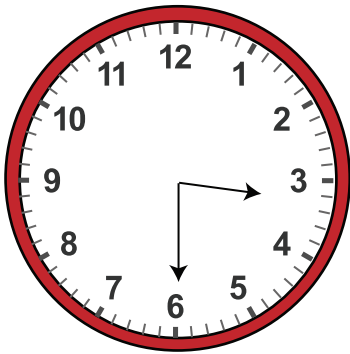


Date:

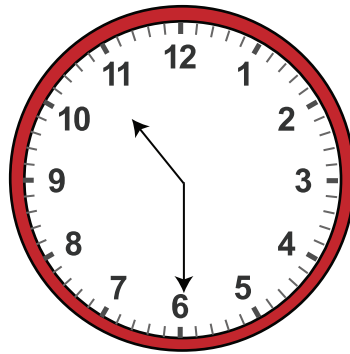
Name:

Solving Multiple Choice with Telling Time to the Half Hours Worksheet


Choose the correct answer from the options given below each clock



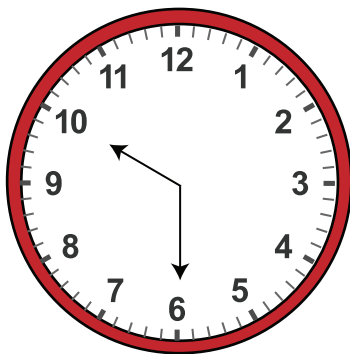
- a. 3:30 am
- b. 3' o clock
- c. Three Thirty
- d. 4:00 am



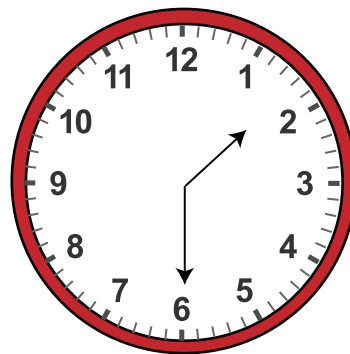
- a. 11:30 am
- b. 12' o clock
- c. Ten Thirty
- d. 11:00 am



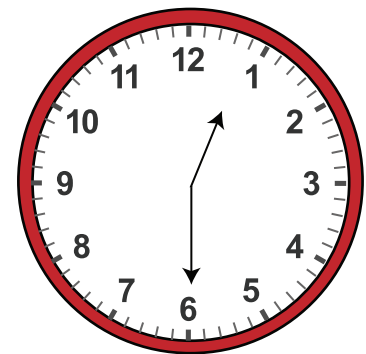
- a. 8 :30 am
- b. 8' o clock
- c. Nine Thirty
- d. 7:00 am



- a. 10:30 am
- b. 10' o clock
- c. Ten Thirty
- d. 10:00 am



- a. 2: 00 am
- b. 1' o clock
- c. One Thirty
- d. 3:00 am



- a. 12 :30 am
- b. 1' o clock
- c. Eleven Thirty
- d. 12:00 am