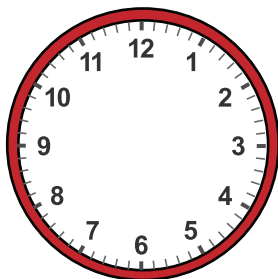
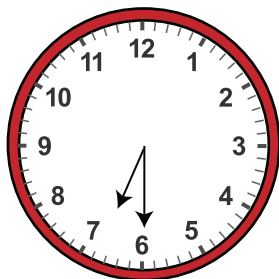


Date:

Name:


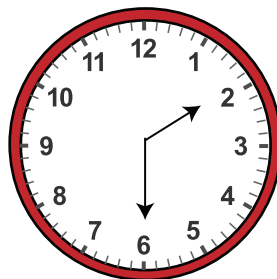
## Finding Forward and Backward Elapsed Time to the Half Hour Worksheet

Draw hands for each clock for the time it was or it will be:



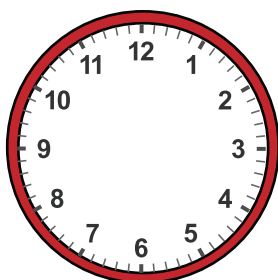
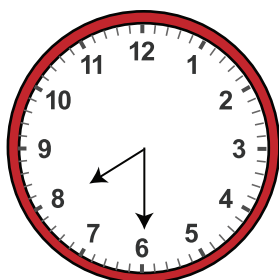
What time it will be in 3 hours?

Answer:




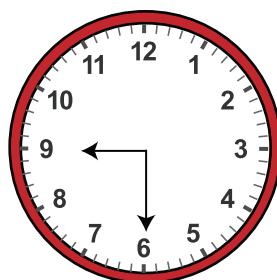
What time was it 2 hour ago?

Answer:



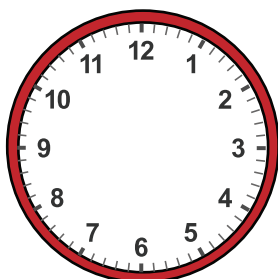
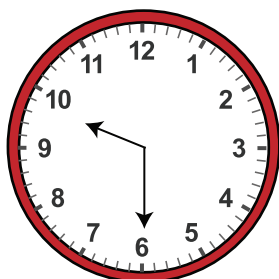
What time it will be in 2 hours?

Answer:




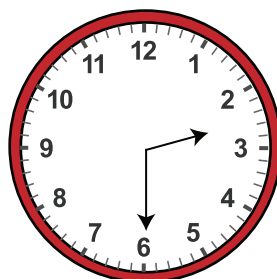
What time was it 5 hour ago?

Answer:



What time it will be in 4 hours?

Answer:



What time was it 1 hour ago?

Answer: