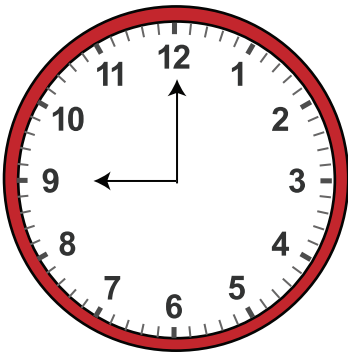


Date:


Name:

## Solving Multiple Choice with Telling Time to Whole Hours Worksheet


Choose the correct answer from the options given below each clock



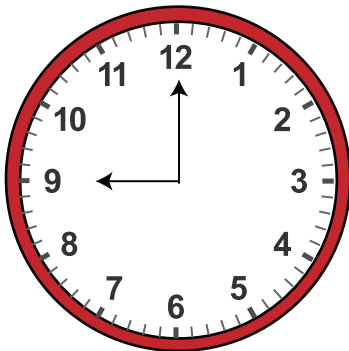
- a. 9:30 am
- b. 9' o clock
- c. Ten Thirty
- d. 10:00 am



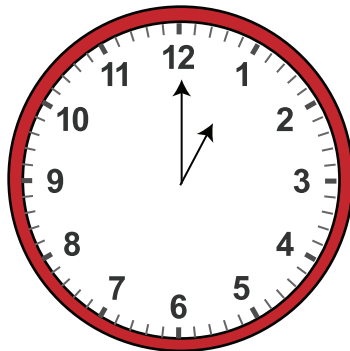
- a. 11:30 am
- b. 12' o clock
- c. Ten Thirty
- d. 23:00 pm



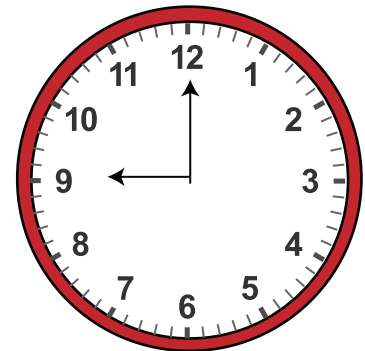
- a. 2 :30 am
- b. 2' o clock
- c. Two Thirty
- d. 14:00 pm



- a. 21:30 am
- b. 21' o clock
- c. Eight Thirty
- d. 10:00 am



- a. 2: 00 am
- b. 1' o clock
- c. One Thirty
- d. 3:00 am



- a. 10 :30 am
- b. 9' o clock
- c. Eleven Thirty
- d. 10:00 am