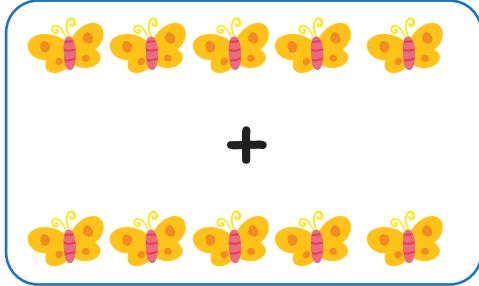



Name :

Date :


# Counting and Finding Missing Numbers Addition Facts to 10



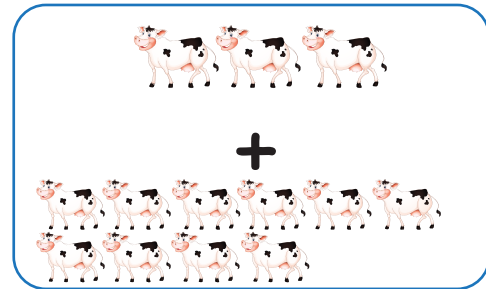
$$\underline{5} + \underline{5} = 10$$



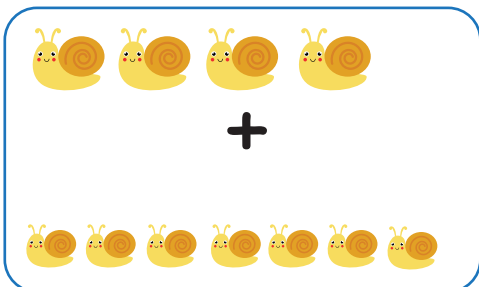
$$\underline{\quad} + \underline{\quad} = 11$$




$$\underline{\quad} + \underline{\quad} = 10$$



$$\underline{\quad} + \underline{\quad} = 13$$



$$\underline{\quad} + \underline{\quad} = 10$$



$$\underline{\quad} + \underline{\quad} = 15$$

