





Name :





Date :





# Addition with Base Ten Blocks











Add the base ten blocks in each set and compare using <, > or =.




1.  +   $\frac{3}{3}$  Tens   $\frac{2}{8}$  Tens  
 $\frac{3}{3}$  Ones   $\frac{8}{8}$  Ones  + 

2.  +   $\frac{\quad}{\quad}$  Tens   $\frac{\quad}{\quad}$  Tens  
 $\frac{\quad}{\quad}$  Ones   $\frac{\quad}{\quad}$  Ones  + 

3.  +   $\frac{\quad}{\quad}$  Tens   $\frac{\quad}{\quad}$  Tens  
 $\frac{\quad}{\quad}$  Ones   $\frac{\quad}{\quad}$  Ones  + 

4.  +   $\frac{\quad}{\quad}$  Tens   $\frac{\quad}{\quad}$  Tens  
 $\frac{\quad}{\quad}$  Ones   $\frac{\quad}{\quad}$  Ones  + 

5.  +   $\frac{\quad}{\quad}$  Tens   $\frac{\quad}{\quad}$  Tens  
 $\frac{\quad}{\quad}$  Ones   $\frac{\quad}{\quad}$  Ones  + 

6.  +   $\frac{\quad}{\quad}$  Tens   $\frac{\quad}{\quad}$  Tens  
 $\frac{\quad}{\quad}$  Ones   $\frac{\quad}{\quad}$  Ones  + 