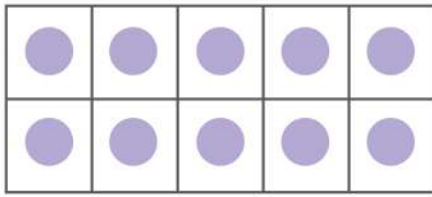


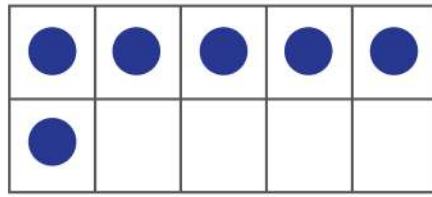
Name :

Date :

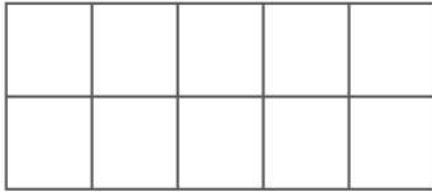
Drawing Missing Blocks Using Addition Problems with Ten Frames



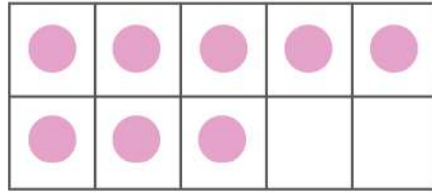
+



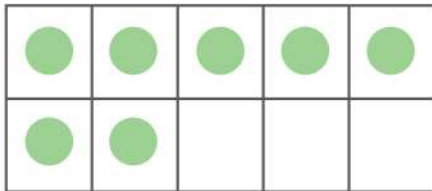
$$= 10 + \boxed{6} = 16$$



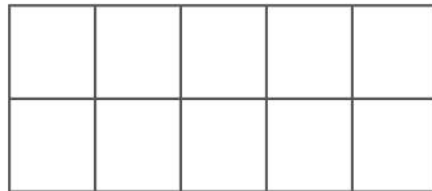
+



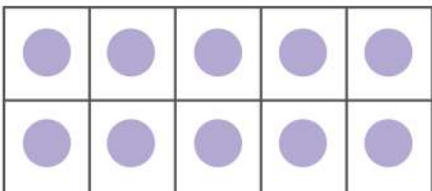
$$= \boxed{} + 8 = 10$$



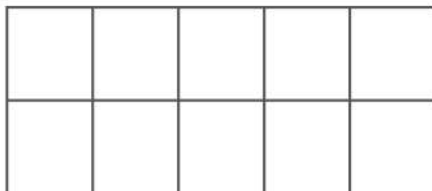
+



$$= 7 + \boxed{} = 17$$



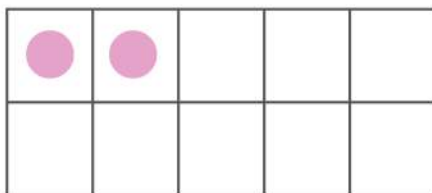
+



$$= 10 + \boxed{} = 19$$



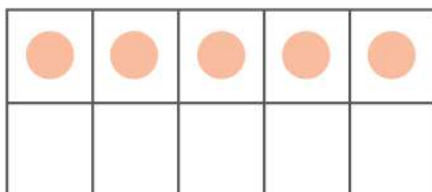
+



$$= \boxed{} + 2 = 6$$



+



$$= \boxed{} + 5 = 13$$

