

Name :

Date :

# Double Ten Frame Addition Worksheets




Add the number of objects of the given number.


$10 + 5$




$7 + 9$



$9 + 4$



$5 + 8$



$4 + 7$



$8 + 5$

