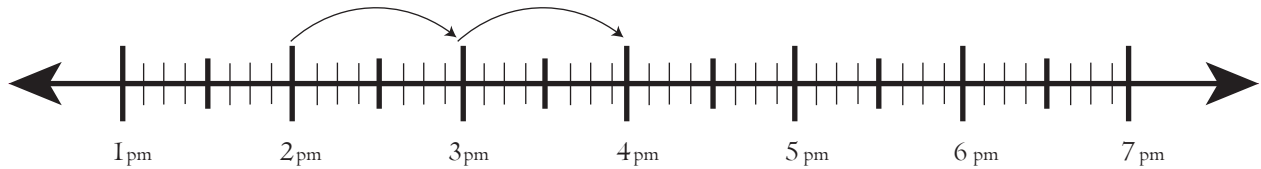


Date:

Name:

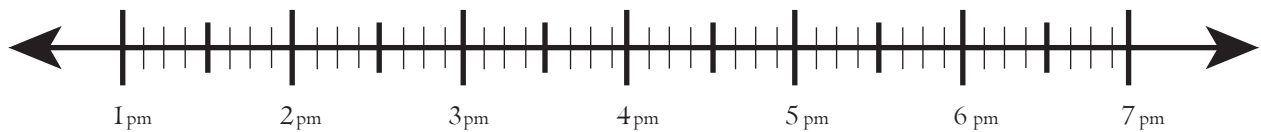
## Worksheet on Finding Elapsed Time to the Hour on Number Line

Starting time : 2:00pm      Ending time : 3:00pm



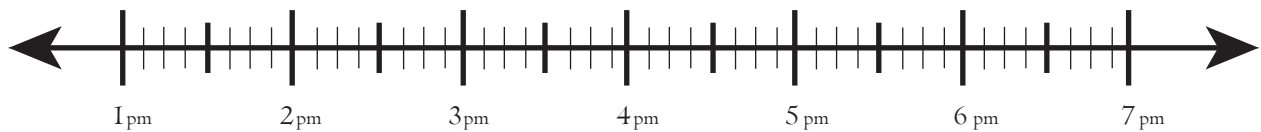
Elapsed Time 1 hour and 30 minutes

Starting time : 4:20 pm      Ending time : 5:20pm



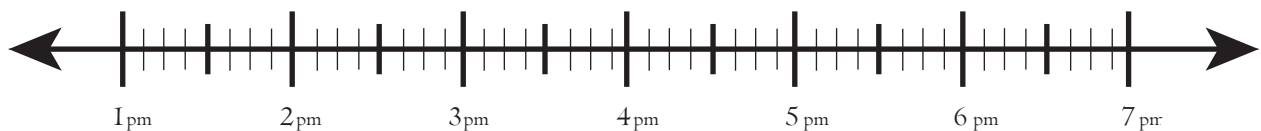
Elapsed Time \_\_\_\_\_

Starting time : 5:40 pm      Ending time : 7:40pm



Elapsed Time \_\_\_\_\_

Starting time : 2:40 pm      Ending time : 6:40pm



Elapsed Time \_\_\_\_\_