

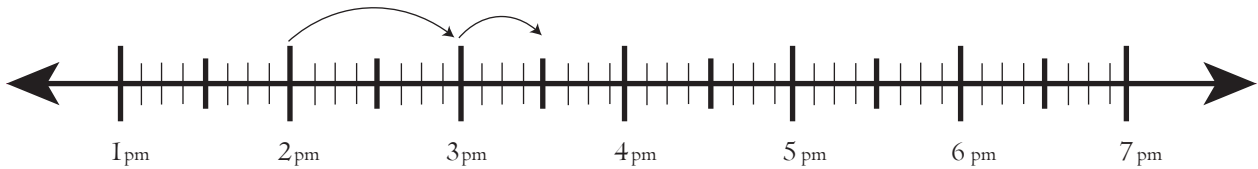
Date:

Name:

Worksheet on Finding Elapsed Time to the Hour on Number Line

Starting time : 3:30pm

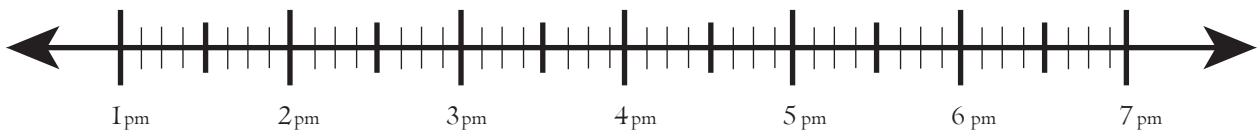
Ending time : 6:30pm



Elapsed Time _____

Starting time : 4:20 pm

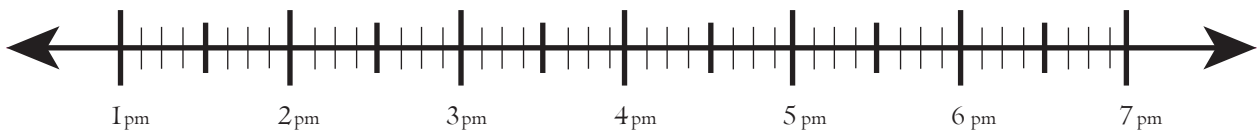
Ending time : 6:20pm



Elapsed Time _____

Starting time : 1:30 pm

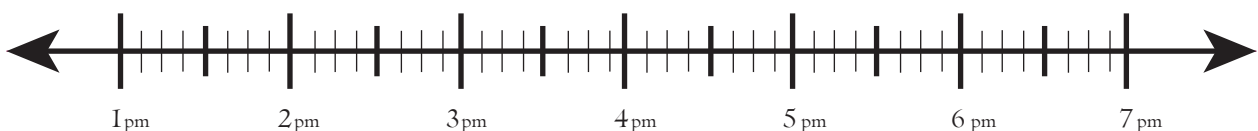
Ending time : 5:30pm



Elapsed Time _____

Starting time : 3:40 pm

Ending time : 6:40pm



Elapsed Time _____