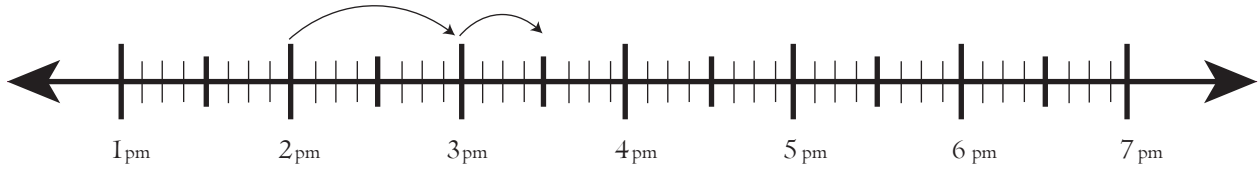


Date:

Name:

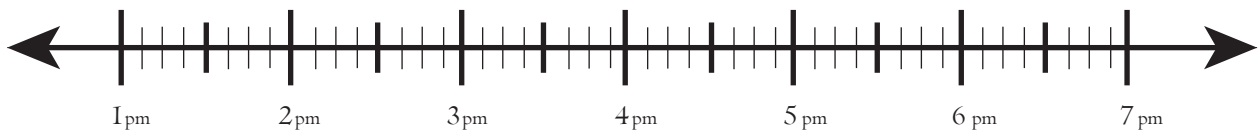
Worksheet on Finding Elapsed Time to the Hour on Number Line

Starting time : 4:50pm Ending time : 6:50pm



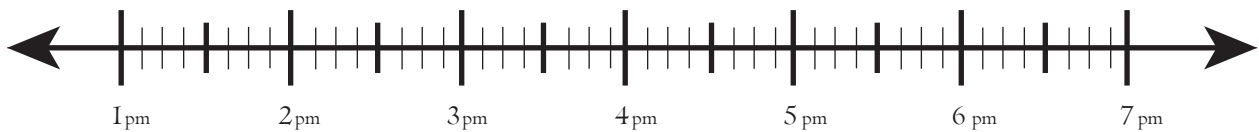
Elapsed Time _____

Starting time : 2:20 pm Ending time : 5:20pm



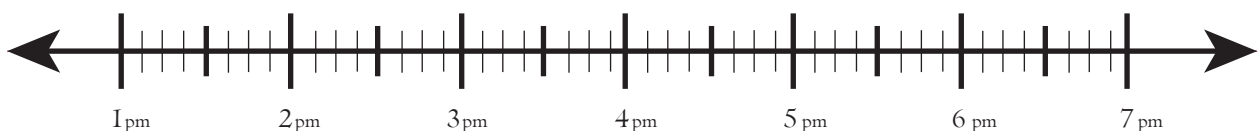
Elapsed Time _____

Starting time : 3:40 pm Ending time : 5:40pm



Elapsed Time _____

Starting time : 2:40 pm Ending time : 6:40pm



Elapsed Time _____