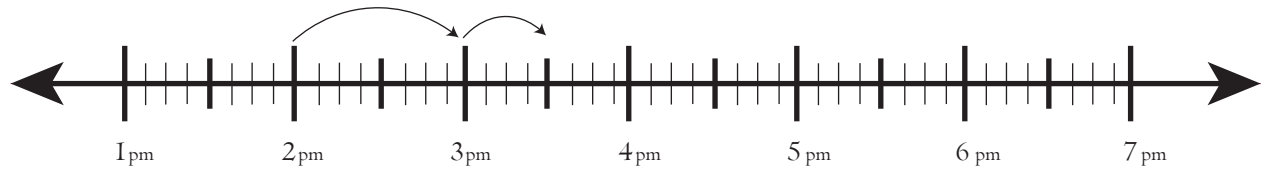


Date:

Name:

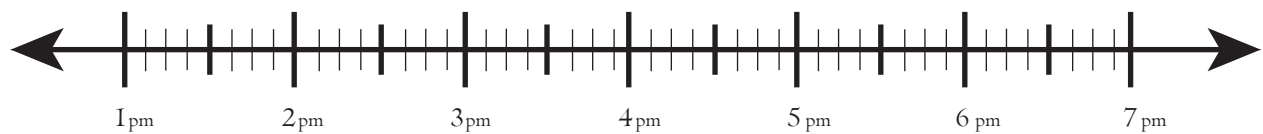
Worksheet on Finding Elapsed Time on Number Line

Starting time : 2:00pm	Ending time : 3:30pm
------------------------	----------------------



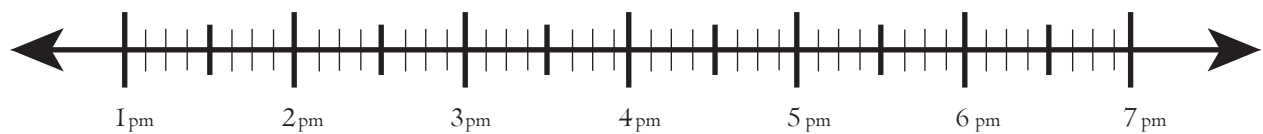
Elapsed Time 1 hour and 30 minutes

Starting time : 4:20 pm	Ending time : 5:50pm
-------------------------	----------------------



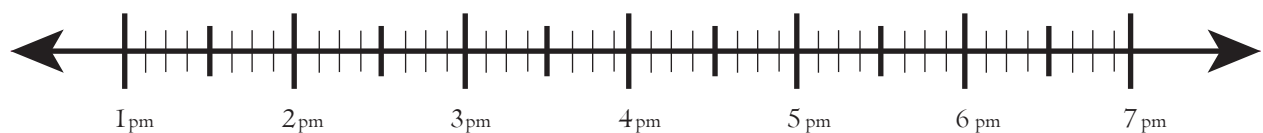
Elapsed Time _____

Starting time : 5:40 pm	Ending time : 6:50pm
-------------------------	----------------------



Elapsed Time _____

Starting time : 2:40 pm	Ending time : 6:40pm
-------------------------	----------------------



Elapsed Time _____