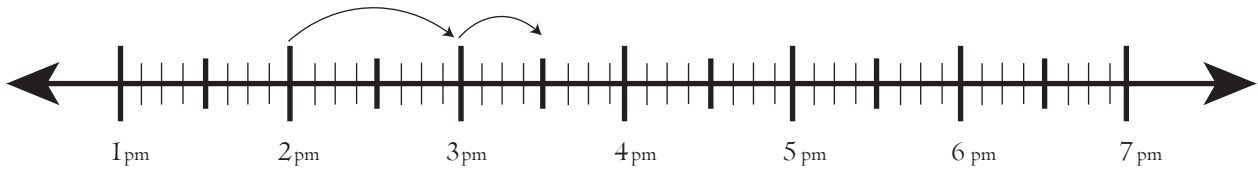


Date:

Name:

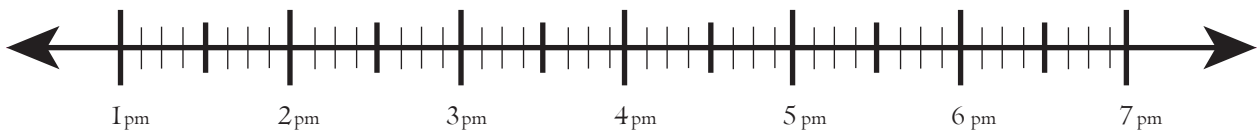
Worksheet on Finding Elapsed Time on Number Line

Starting time : 3:00pm Ending time : 6:30pm



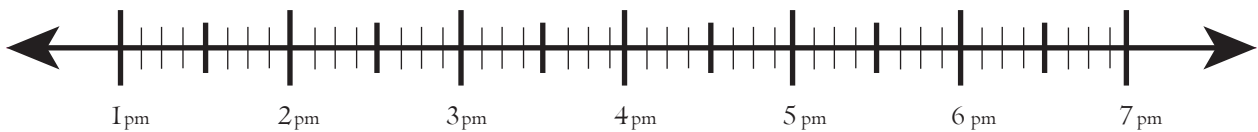
Elapsed Time _____

Starting time : 6:20 pm Ending time : 7:50pm



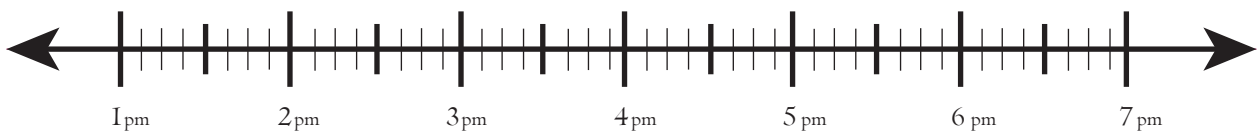
Elapsed Time _____

Starting time : 1:30 pm Ending time : 5:30pm



Elapsed Time _____

Starting time : 3:40 pm Ending time : 7:40pm



Elapsed Time _____