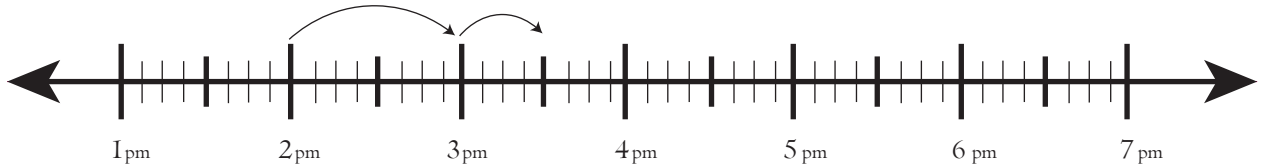


Date:

Name:

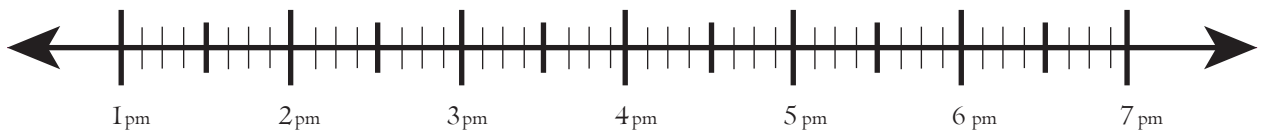
Worksheet on Finding Elapsed Time on Number Line

Starting time : 4:50pm	Ending time : 6:40pm
------------------------	----------------------



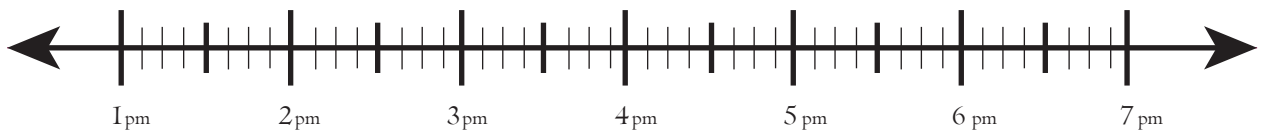
Elapsed Time _____

Starting time : 2:20 pm	Ending time : 5:50pm
-------------------------	----------------------



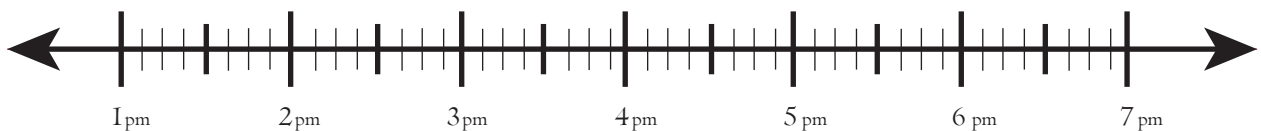
Elapsed Time _____

Starting time : 3:40 pm	Ending time : 5:20pm
-------------------------	----------------------



Elapsed Time _____

Starting time : 3:40 pm	Ending time : 5:40pm
-------------------------	----------------------



Elapsed Time _____