


Name: \_\_\_\_\_

# Matching the Fractions

Draw a line to match the shape, the word and the number form of each fraction.




$$\frac{2}{3}$$

Two fifths



$$\frac{1}{4}$$

Two thirds



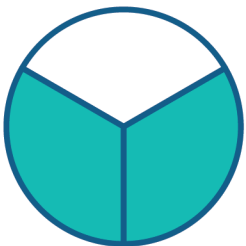
$$\frac{1}{5}$$

One fourth



$$\frac{2}{5}$$

One fifth



$$\frac{3}{5}$$

Three fifths

