


Name: \_\_\_\_\_

# Matching the Fractions

Draw a line to match the shape, the word and the number form of each fraction.




$$\frac{3}{5}$$

Four ninths




$$\frac{1}{5}$$

Three ninths



$$\frac{4}{9}$$

Five ninths



$$\frac{5}{9}$$

Three fifths



$$\frac{3}{9}$$

One fifth

