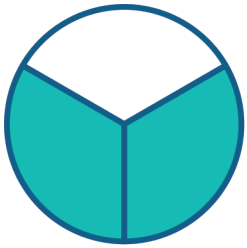


Name: \_\_\_\_\_

# Matching the Fractions

Draw a line to match the shape, the word and the number form of each fraction.



$$\frac{5}{9}$$

Two fifths




$$\frac{1}{5}$$

Two thirds



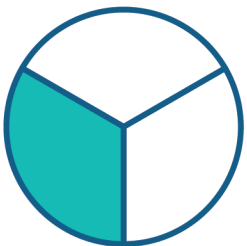
$$\frac{2}{5}$$

Five ninths



$$\frac{1}{3}$$

One fifth



$$\frac{2}{3}$$

One third

