


Name: _____

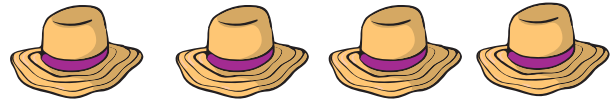
Finding Half of a Group of Objects



Write half of each group of objects.



Half of 10 is 5



Half of 4 is _____




Half of 6 is _____



Half of 8 is _____



Half of 14 is _____



Half of 12 is _____

