

Name: _____

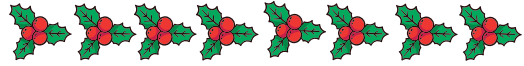
Finding Half of a Group of Objects




Write half of each group of objects.




Half of 20 is _____




Half of 8 is _____




Half of 18 is _____



Half of 14 is _____



Half of 12 is _____



Half of 8 is _____

