

Name :

Date :

Practicing Addition Problems Using Number Line Worksheets



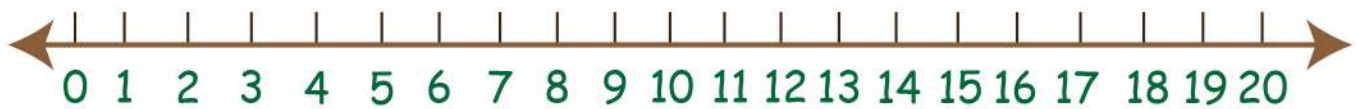
$$5 + 6 = 11$$



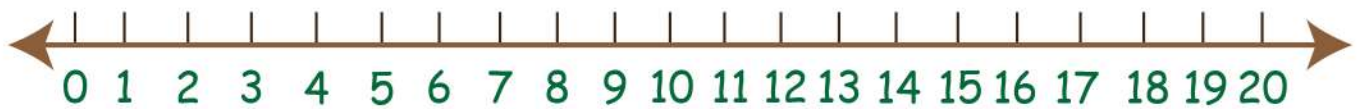
$$3 + 2 = \square$$



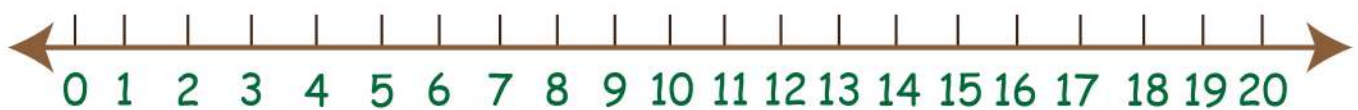
$$15 + 4 = \square$$



$$4 + 9 = \square$$



$$8 + 4 = \square$$



$$2 + 2 = \square$$

