

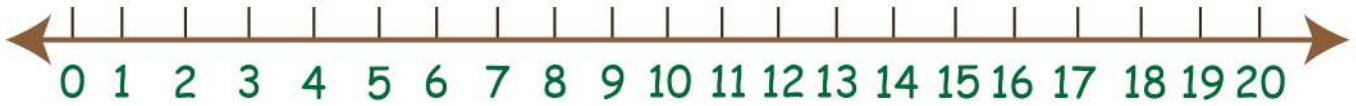
Name :

Date :

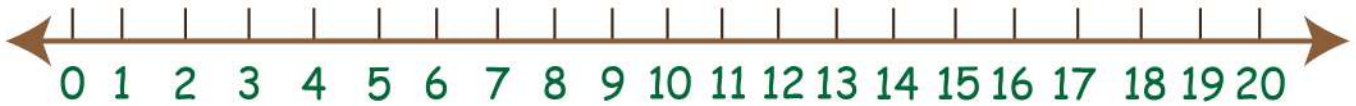
Practicing Addition Problems Using Number Line Worksheets



$$15 + 5 = \square$$



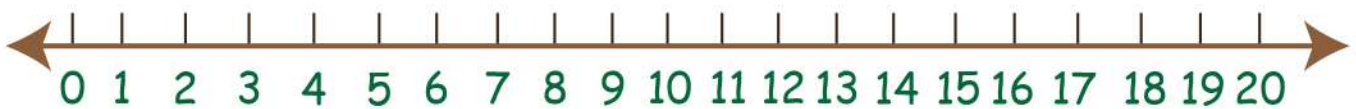
$$9 + 3 = \square$$



$$5 + 8 = \square$$



$$16 + 3 = \square$$



$$17 + 2 = \square$$



$$10 + 5 = \square$$

