



Name :

Date :



# Counting and Adding Elements Using Number Line





0 1 2 3 4 5 6 7 8 9 10 11 12 13 14 15 16 17 18 19 20

 +  = \_\_\_ + \_\_\_ = \_\_\_



0 1 2 3 4 5 6 7 8 9 10 11 12 13 14 15 16 17 18 19 20

 +  = \_\_\_ + \_\_\_ = \_\_\_



0 1 2 3 4 5 6 7 8 9 10 11 12 13 14 15 16 17 18 19 20

 +  = \_\_\_ + \_\_\_ = \_\_\_

0 1 2 3 4 5 6 7 8 9 10 11 12 13 14 15 16 17 18 19 20

 +  = \_\_\_ + \_\_\_ = \_\_\_

0 1 2 3 4 5 6 7 8 9 10 11 12 13 14 15 16 17 18 19 20

 +  = \_\_\_ + \_\_\_ = \_\_\_

