

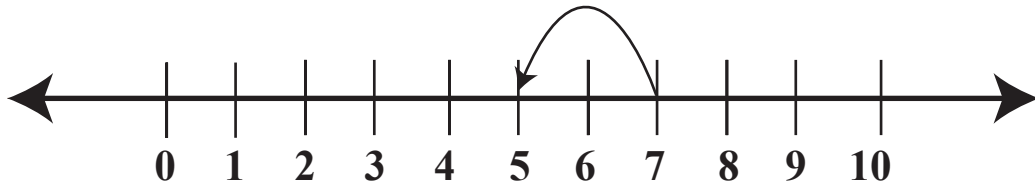
Name :

Date :

# Number Line Equations

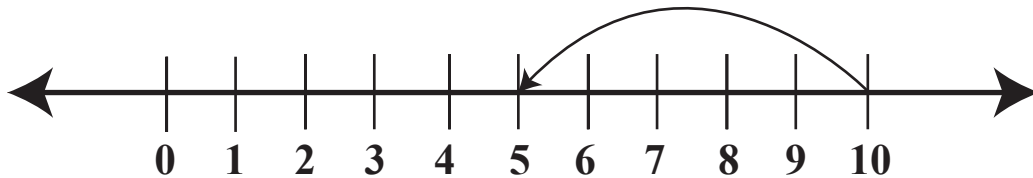
Subtraction of the number line equation to 10.

1.



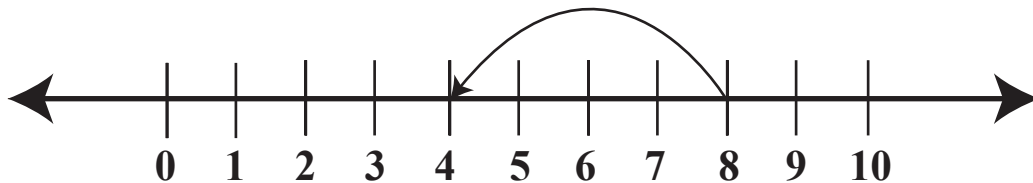
$$\boxed{7} - \boxed{2} = \boxed{5}$$

2.



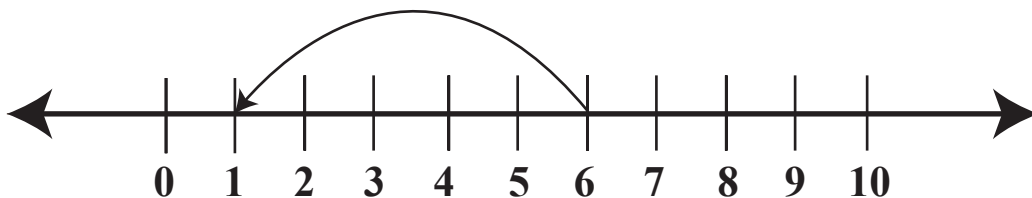
$$\boxed{\phantom{0}} - \boxed{\phantom{0}} = \boxed{\phantom{0}}$$

3.



$$\boxed{\phantom{0}} - \boxed{\phantom{0}} = \boxed{\phantom{0}}$$

4.



$$\boxed{\phantom{0}} - \boxed{\phantom{0}} = \boxed{\phantom{0}}$$

