

Name :

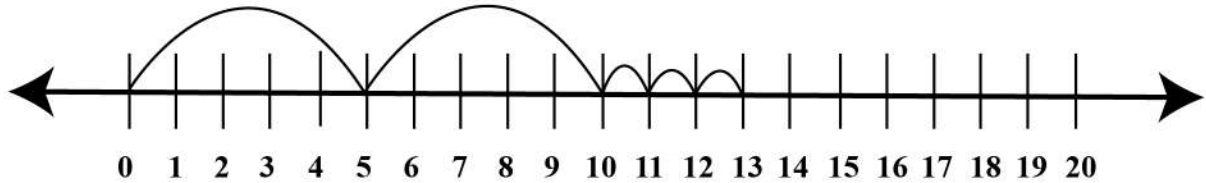
Date :

Open Number Line Addition

Using open number line to jumps of fives and ones.

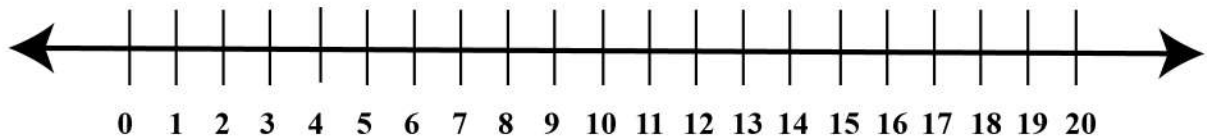
1.

$$\boxed{10} + \boxed{3} = \boxed{13}$$



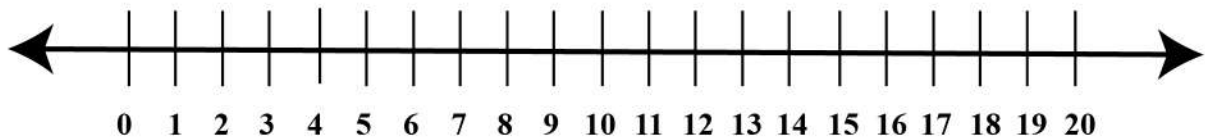
2.

$$\boxed{5} + \boxed{2} = \boxed{}$$



3.

$$\boxed{15} + \boxed{5} = \boxed{}$$



4.

$$\boxed{10} + \boxed{5} = \boxed{}$$

