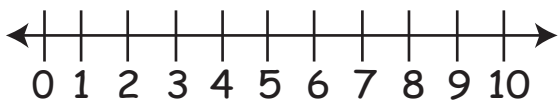




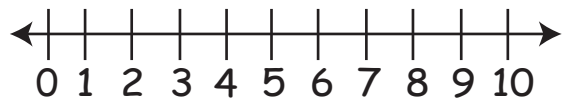
## Worksheet on Subtraction from 10 Using Number Line

Use the number line to subtract from 10:

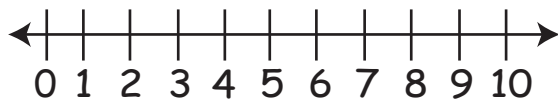
1.  $10 - 6 =$



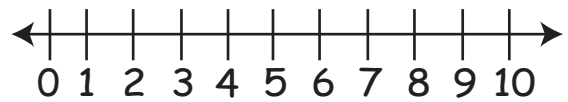
6.  $10 - 5 =$



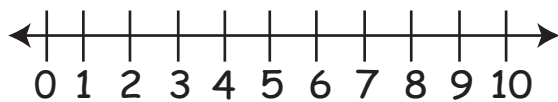
2.  $10 - 8 =$



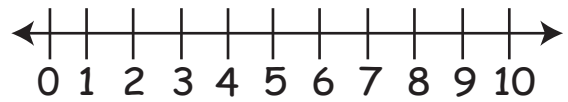
7.  $10 - 1 =$



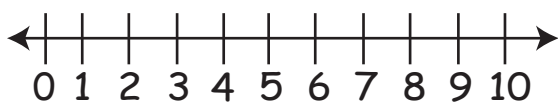
3.  $10 - 2 =$



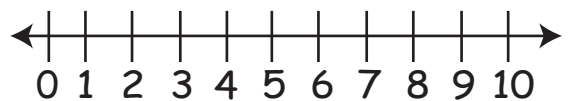
8.  $10 - 4 =$



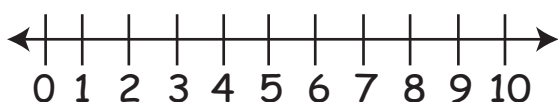
4.  $10 - 7 =$



9.  $10 - 3 =$



5.  $10 - 10 =$



10.  $10 - 9 =$

