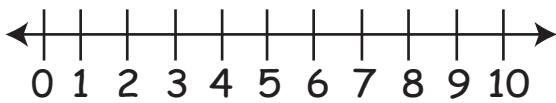




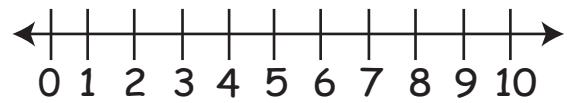
Worksheet on Subtraction from 10 Using Number Line

Use the number line to subtract from 10:

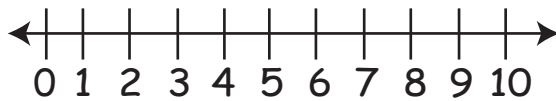
1. $10 - 3 =$



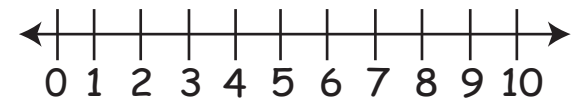
6. $10 - 6 =$



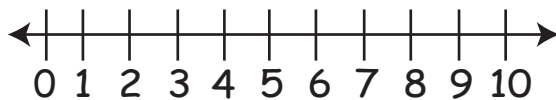
2. $10 - 9 =$



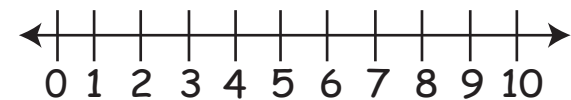
7. $10 - 4 =$



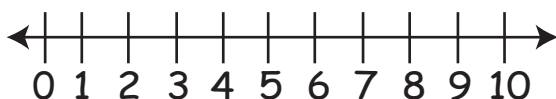
3. $10 - 1 =$



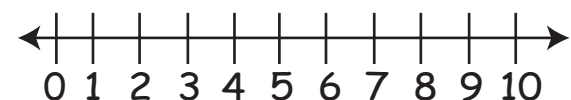
8. $10 - 2 =$



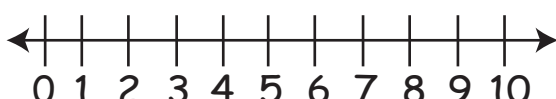
4. $10 - 5 =$



9. $10 - 7 =$



5. $10 - 8 =$



10. $10 - 10 =$

