



Name :

Date :


Solving Vertical Addition with Pictures up to 10





$$\begin{array}{r} 2 \\ + 5 \\ \hline 7 \end{array}$$

2 
+ 5 
7

$$\begin{array}{r} 1 \\ + 8 \\ \hline \end{array}$$

1 
+ 8 



$$\begin{array}{r} 2 \\ + 3 \\ \hline \end{array}$$

2 
+ 3 

$$\begin{array}{r} 4 \\ + 5 \\ \hline \end{array}$$

4 
+ 5 

$$\begin{array}{r} 4 \\ + 6 \\ \hline \end{array}$$

4 
+ 6 

$$\begin{array}{r} 3 \\ + 3 \\ \hline \end{array}$$

3 
+ 3 

$$\begin{array}{r} 4 \\ + 6 \\ \hline \end{array}$$

4 
+ 6 

$$\begin{array}{r} 1 \\ + 3 \\ \hline \end{array}$$

1 
+ 3 

