



Name :


Date :


Solving Vertical Addition with Pictures up to 10



$$\begin{array}{r} 2 \\ + 0 \\ \hline \end{array}$$


$$\begin{array}{r} 5 \\ + 5 \\ \hline \end{array}$$


$$\begin{array}{r} 6 \\ + 2 \\ \hline \end{array}$$


$$\begin{array}{r} 2 \\ + 4 \\ \hline \end{array}$$


$$\begin{array}{r} 9 \\ + 1 \\ \hline \end{array}$$


$$\begin{array}{r} 1 \\ + 1 \\ \hline \end{array}$$


$$\begin{array}{r} 8 \\ + 0 \\ \hline \end{array}$$


$$\begin{array}{r} 2 \\ + 2 \\ \hline \end{array}$$
