





Name :



Date :

# Solving Vertical Addition with Pictures up to 10







$$\begin{array}{r} 3 \\ + 4 \\ \hline \end{array}$$
  




$$\begin{array}{r} 2 \\ + 7 \\ \hline \end{array}$$
  


$$\begin{array}{r} 6 \\ + 4 \\ \hline \end{array}$$
  


$$\begin{array}{r} 4 \\ + 4 \\ \hline \end{array}$$
  


$$\begin{array}{r} 5 \\ + 1 \\ \hline \end{array}$$
  


$$\begin{array}{r} 3 \\ + 6 \\ \hline \end{array}$$
  


$$\begin{array}{r} 3 \\ + 3 \\ \hline \end{array}$$
  


$$\begin{array}{r} 1 \\ + 4 \\ \hline \end{array}$$
  