



Name :


Date :

Solving Vertical Addition with Pictures up to 20 Worksheets

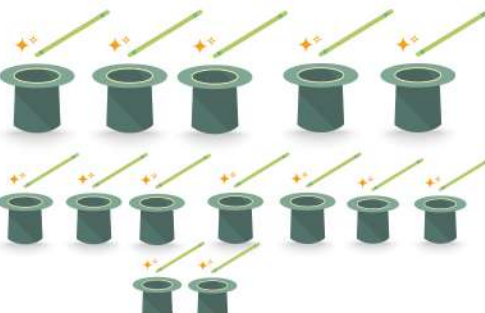



$$\begin{array}{r} 6 \\ + 6 \\ \hline 12 \end{array}$$



$$\begin{array}{r} 4 \\ + 7 \\ \hline \end{array}$$


$$\begin{array}{r} 5 \\ + 7 \\ \hline \end{array}$$


$$\begin{array}{r} 11 \\ + 0 \\ \hline \end{array}$$


$$\begin{array}{r} 5 \\ + 9 \\ \hline \end{array}$$


$$\begin{array}{r} 13 \\ + 6 \\ \hline \end{array}$$


$$\begin{array}{r} 3 \\ + 12 \\ \hline \end{array}$$


$$\begin{array}{r} 8 \\ + 4 \\ \hline \end{array}$$