


Name :


Date :

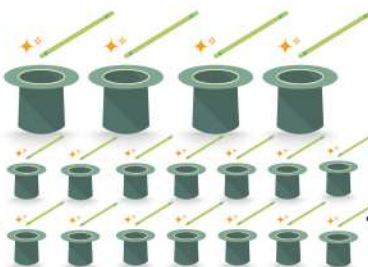
Solving Vertical Addition with Pictures up to 20 Worksheets




$$\begin{array}{r} 3 \\ + 12 \\ \hline \end{array}$$



$$\begin{array}{r} 6 \\ + 7 \\ \hline \end{array}$$


$$\begin{array}{r} 6 \\ + 10 \\ \hline \end{array}$$


$$\begin{array}{r} 4 \\ + 14 \\ \hline \end{array}$$


$$\begin{array}{r} 8 \\ + 6 \\ \hline \end{array}$$


$$\begin{array}{r} 13 \\ + 5 \\ \hline \end{array}$$


$$\begin{array}{r} 18 \\ + 2 \\ \hline \end{array}$$


$$\begin{array}{r} 3 \\ + 15 \\ \hline \end{array}$$