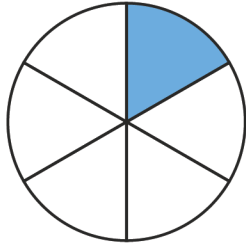


Name: \_\_\_\_\_

# Writing Equivalent Fractions

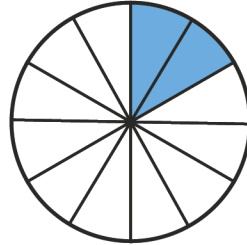


Write the missing equivalent fractions.

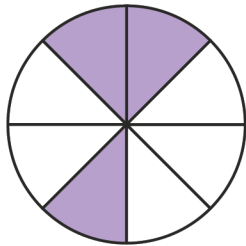


$$\frac{1}{6}$$

=

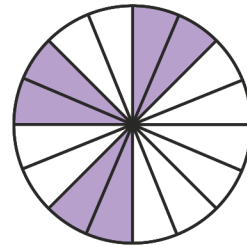


$$\frac{\square}{12}$$

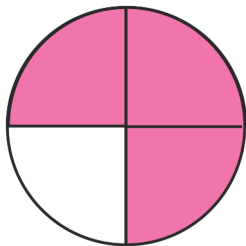


$$\frac{3}{8}$$

=

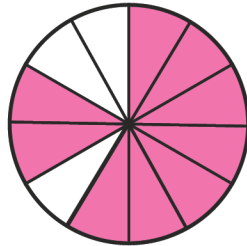


$$\frac{\square}{16}$$

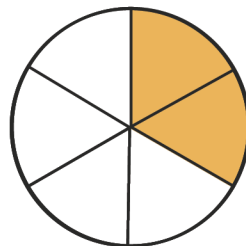


$$\frac{3}{4}$$

=

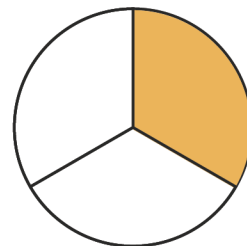


$$\frac{\square}{12}$$

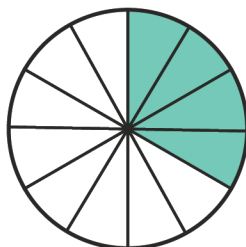


$$\frac{2}{6}$$

=

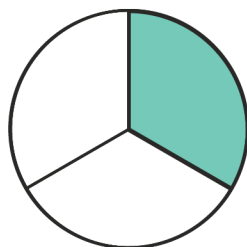


$$\frac{\square}{3}$$



$$\frac{4}{12}$$

=



$$\frac{\square}{3}$$

