


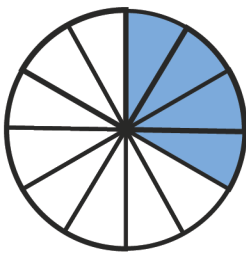
Name: _____

Matching Game

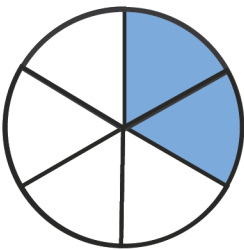
Draw a line to match the shape and fraction.



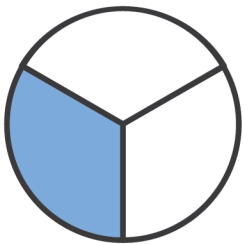
$$\frac{2}{6}$$



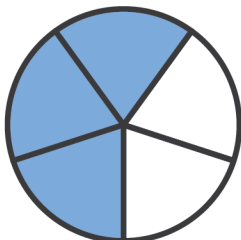
$$\frac{1}{3}$$



$$\frac{3}{5}$$



$$\frac{2}{4}$$



$$\frac{4}{12}$$

