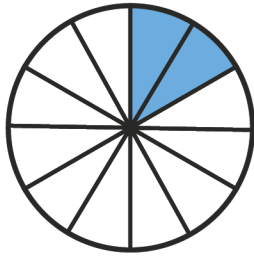


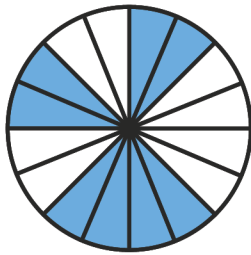
Name: _____

Matching Game

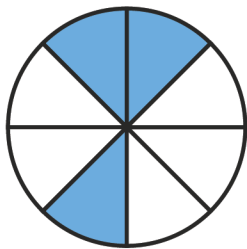
Draw a line to match the shape and fraction.



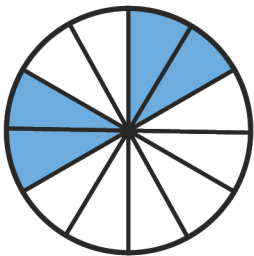
$$\frac{3}{8}$$



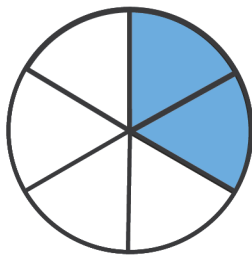
$$\frac{2}{6}$$



$$\frac{4}{12}$$



$$\frac{8}{16}$$



$$\frac{2}{12}$$

