

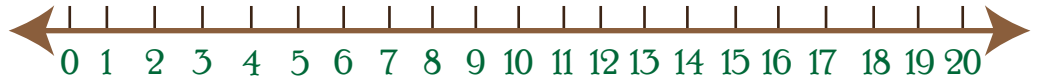
Name: _____

Date: _____

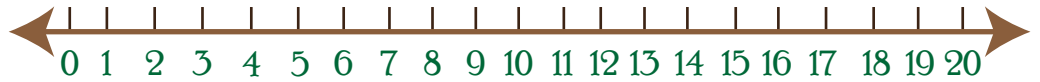
Practicing 2 Digit by 1 Digit Addition with the Help of Number Lines

Add the numbers and justify your answers using
the number lines.

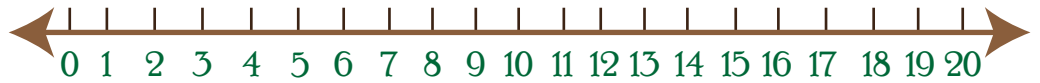
$13 + 6 = \square$



$14 + 0 = \square$



$11 + 9 = \square$



$16 + 1 = \square$



$18 + 2 = \square$



$11 + 7 = \square$

