




# Finding Subtraction Facts to 10 by Crossing Out


Write the subtraction to represent each picture model:



$$\square - \square = \square$$



$$\square - \square = \square$$




$$\square - \square = \square$$



$$\square - \square = \square$$



$$\square - \square = \square$$



$$\square - \square = \square$$