




Finding Subtraction Facts to 10 by Crossing Out


Write the subtraction to represent each picture model:



$$\boxed{13} - \boxed{10} = \boxed{3}$$




$$\boxed{} - \boxed{} = \boxed{}$$




$$\boxed{} - \boxed{} = \boxed{}$$



$$\boxed{} - \boxed{} = \boxed{}$$



$$\boxed{} - \boxed{} = \boxed{}$$



$$\boxed{} - \boxed{} = \boxed{}$$