




Finding Subtraction Facts to 20 by Crossing Out


Write the subtraction to represent each picture model:



$$\text{○} - \text{○} = \text{○}$$




$$\text{○} - \text{○} = \text{○}$$



$$\text{○} - \text{○} = \text{○}$$



$$\text{○} - \text{○} = \text{○}$$



$$\text{○} - \text{○} = \text{○}$$