

Finding Subtraction Facts to 5 by Crossing Out

Write the subtraction to represent each picture model:




$$\boxed{12} - \boxed{5} = \boxed{7}$$



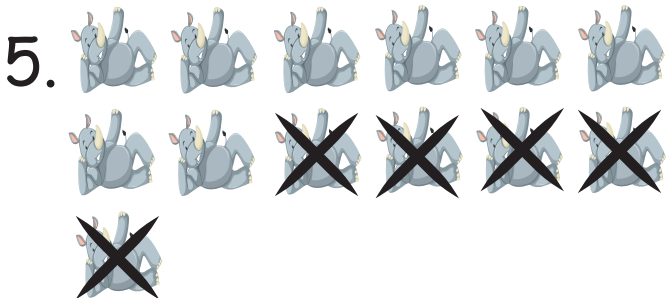
$$\boxed{} - \boxed{} = \boxed{}$$




$$\boxed{} - \boxed{} = \boxed{}$$



$$\boxed{} - \boxed{} = \boxed{}$$



$$\boxed{} - \boxed{} = \boxed{}$$



$$\boxed{} - \boxed{} = \boxed{}$$