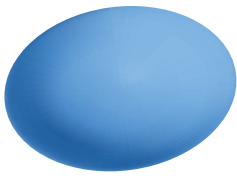


Name:


Multiple Choice



Choose the correct name of each 3d shape.




- Cube
- Ellipsoid
- Torus



- Square frustum
- Sphere
- Tube




- Tube
- Square pyramid
- Cone



- Cube
- Pyramid
- Torus



- Rectangular prism
- Square pyramid
- Icosahedron



- Cone
- hexagonal prism
- Sphere

