







Subtracting and Matching Facts to 10

Match the subtraction with the correct answer.


1. 
 $15 - 10$

2. 
 $10 - 10$

3. 
 $12 - 10$


4. 
 $17 - 10$


5. 
 $14 - 10$

6. 
 $16 - 10$


6


4


5


0


2


7