






Subtracting and Matching Facts to 10

Match the subtraction with the correct answer.


1. 
 $20 - 10$

2. 
 $18 - 10$

3. 
 $11 - 10$

4. 
 $13 - 10$

5. 
 $21 - 10$

6. 
 $16 - 10$

