






Subtracting and Matching Facts to 10

Match the subtraction with the correct answer.

1. 
 $14 - 10$

2. 
 $11 - 10$

3. 
 $17 - 10$

4. 
 $25 - 10$

5. 
 $10 - 10$

6. 
 $19 - 10$

