




Using Ten Blocks for Making 10

1) $17 - 9 = \boxed{8}$

\swarrow \searrow
 $\boxed{7} + 2$
 $17 - 9 = \underline{8}$

$17 - \underline{7} = \underline{10}$

$10 - \underline{2} = \underline{8}$




2) $16 - 8 = \boxed{\quad}$

$16 - 8 = \underline{\quad}$

$16 - \underline{\quad} = \underline{\quad}$

$10 - \underline{\quad} = \underline{\quad}$

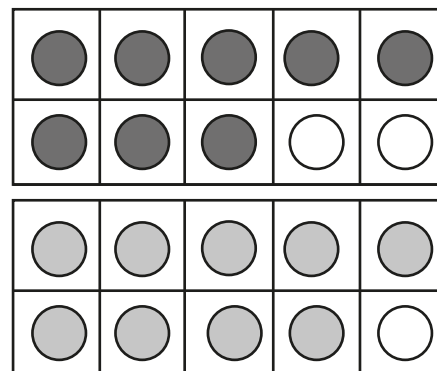


3) $19 - 11 = \boxed{\quad}$

$19 - 11 = \underline{\quad}$

$19 - \underline{\quad} = \underline{\quad}$

$10 - \underline{\quad} = \underline{\quad}$



4) $13 - 5 = \boxed{\quad}$

$13 - 5 = \underline{\quad}$

$13 - \underline{\quad} = \underline{\quad}$

$10 - \underline{\quad} = \underline{\quad}$

