




# Using Ten Blocks for Making 10

1)  $16 - 9 = \square$


$16 - \underline{\quad} = \underline{\quad}$   
 $10 - \underline{\quad} = \underline{\quad}$



$16 - 9 = \underline{\quad}$

2)  $15 - 9 = \square$


$15 - \underline{\quad} = \underline{\quad}$   
 $10 - \underline{\quad} = \underline{\quad}$



$15 - 9 = \underline{\quad}$

3)  $19 - 13 = \square$


$19 - \underline{\quad} = \underline{\quad}$   
 $10 - \underline{\quad} = \underline{\quad}$



$19 - 13 = \underline{\quad}$

4)  $18 - 10 = \square$

$17 - \underline{\quad} = \underline{\quad}$   
 $10 - \underline{\quad} = \underline{\quad}$



$18 - 10 = \underline{\quad}$