



Subtraction with Pictures within 10



Subtraction

Write the answer inside the box

1



$3 - 1 =$


2

2




$2 - 1 =$

3



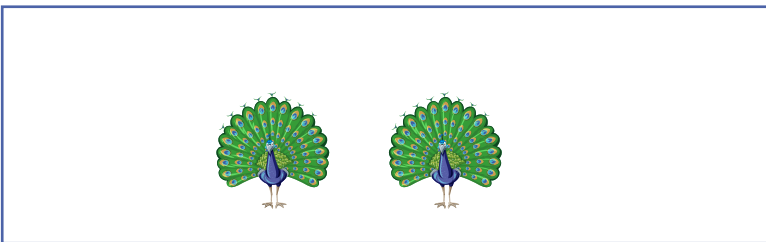
$3 - 2 =$

4



$4 - 2 =$

5



$2 - 2 =$