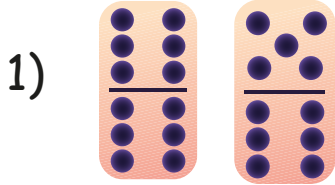


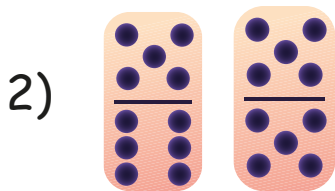


Doubles Minus 1 Worksheets With Pictures


Count the dots in the pictures and solve the problems.




$12 + 11 = \underline{\hspace{2cm}}$



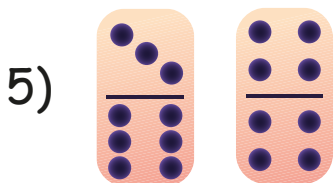
$11 + 10 = \underline{\hspace{2cm}}$



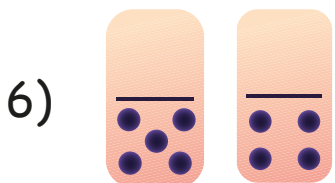
$10 + 9 = \underline{\hspace{2cm}}$



$8 + 7 = \underline{\hspace{2cm}}$



$9 + 8 = \underline{\hspace{2cm}}$



$5 + 4 = \underline{\hspace{2cm}}$